

## SECTION A

1. Name any one semi –cardinal point of a compass.

---

2. What is urban to urban migration?

---

3. State any one way school children should respect leaders in the school community.

---

4. Why is the East African Community called inter- Government organization?

---

5. How did the late Dr. Milton Obote contribute to Uganda's attaining of independence?

---

6. What are escarpments?

---

7. Which organ in the EAC, does the similar work as the Parliament of Uganda?

---


8. Why should a banana farmer settle within the Equatorial climate region?

---

9. Name the National language of Kenya and Tanzania.

---

10. In the space below, draw a symbol of a rift valley.



11. State any one cause for the collapse of EAC in 1977

---

12. Give the main duty of Executive in a democratic country.

---

13. In which time zone do we find Uganda?

---

14. How did the early Arab traders travel to the East African Coast?

---

15. Name the source of the raw material potters use in their work.

---

16. Why do people in Mbale see the sun before those in Jinja?

---

17. What is Anthropology as one source of History?

---

18. Give one factor that can influence population distribution in Uganda.

---

19. What lesson do you learn from the legend of “Nambi, Kintu and Walumbe”?

---

20. Which type of leaders come to office through inheritance?

---

21. Name any one thing that people use to manage rainy weather.

---

22. State the place where the barber works.

---

23. Give any one natural material used to make baskets.

---

24. How is a sailor able to find direction of places?

---

25. Which water body washes the East African coast?

---

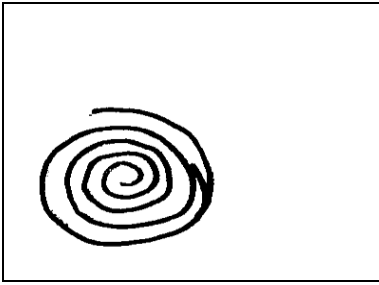
26. Why is water transport not possible between Lake Victoria and Lake Albert?

---

27. Mention one characteristic of planted forests.

---

28. Name the map symbol drawn below.



---

29. What element of a map shows the detailed information about it?

---

30. Mention the process that led to the formation of crater lakes.

---

31. State any one group of people who protect children's rights.

---

32. Why is land regarded as the most important resource?

---

33. How was the union Jack treated on 9<sup>th</sup> October 1962?

---

34. Which organ of a democratic government implements laws?

---

35. Mention any one human activity that does not promote climate

---

In questions 36 – 40, answer either Christianity Or Islam but not both a number.

36. Either: How can a prayer be useful to a Christian?

---

Or: How can a prayer be useful to a Muslim?

---

37:Either : Name the King of Judea who wanted to kill baby Jesus.

---

Or: Name the reason why the people of Mecca wanted to kill Mohammad.

---

38. Either: What is lent?

---

Or: What is Saum?

---

39. Either: Name the foreigners who introduced Christianity in Uganda.

---

Or: Name the foreigners who introduced Islam in Uganda.

---

For Both:

40.State one way in which the Uganda Martyrs met their death.

---

SECTION B

41a) What are social services?

---

b) Mention any two social services provided by the government.

(i)\_\_\_\_\_

(ii)\_\_\_\_\_

c) Give any one problem faced by government in providing social services.

---

42.a)Mention any two examples of furniture found in a sitting room.

(i)\_\_\_\_\_

(ii)\_\_\_\_\_

b) State two ways in which people care for their property.

(i)\_\_\_\_\_

(ii)\_\_\_\_\_

43.a)How can the pupil's attendance be known in a school?

---

b) State any two dangers of high number of pupils in a class.

(i) \_\_\_\_\_

(ii) \_\_\_\_\_

c) Why is it important to know the number of children in a class?

\_\_\_\_\_

44a) Name any two places where wildlife is conserved.

(i) \_\_\_\_\_

(ii) \_\_\_\_\_

b) State any two challenges facing wildlife.

(i) \_\_\_\_\_

(ii) \_\_\_\_\_

45. Match the following physical features with their formation.

**Physical features**

**Type of formation**

-Lake Bunyonyi

Block mountain

-Lake Kyoga

Volcanic mountain

-Mountain Rwenzori

Law demmed lake

-Mountain Rwenzori

Basin lake

(i) Mountain Rwenzori \_\_\_\_\_

(ii) Lake Kyoga \_\_\_\_\_

(iii) Mountain Elgon \_\_\_\_\_

(iv) Mountain Rwenzori \_\_\_\_\_

46.a) Which European country ruled Uganda between 1894 and 1962?

---

b) What political event took place in Uganda on 9<sup>th</sup> October 1962?

---

c) Give any two contributions of colonial rule to the people of Uganda.

(i) \_\_\_\_\_

(ii) \_\_\_\_\_

47a) Name the mineral found where these lakes are found.

i) Lake Katwe: \_\_\_\_\_

ii) Lake Albert: \_\_\_\_\_

b) Which mineral is used to make cement?

---

c) Why is mining called an industry?

---

48a) Which department of the police is responsible for

(i) Stopping fire \_\_\_\_\_

(ii) Controlling traffic \_\_\_\_\_

b) Under which ministry is the Uganda police?

---

c) State the main work of the Uganda police.

---

49.a) Give any two ways how children can maintain the sanitation of the school.

(i) \_\_\_\_\_

(ii) \_\_\_\_\_

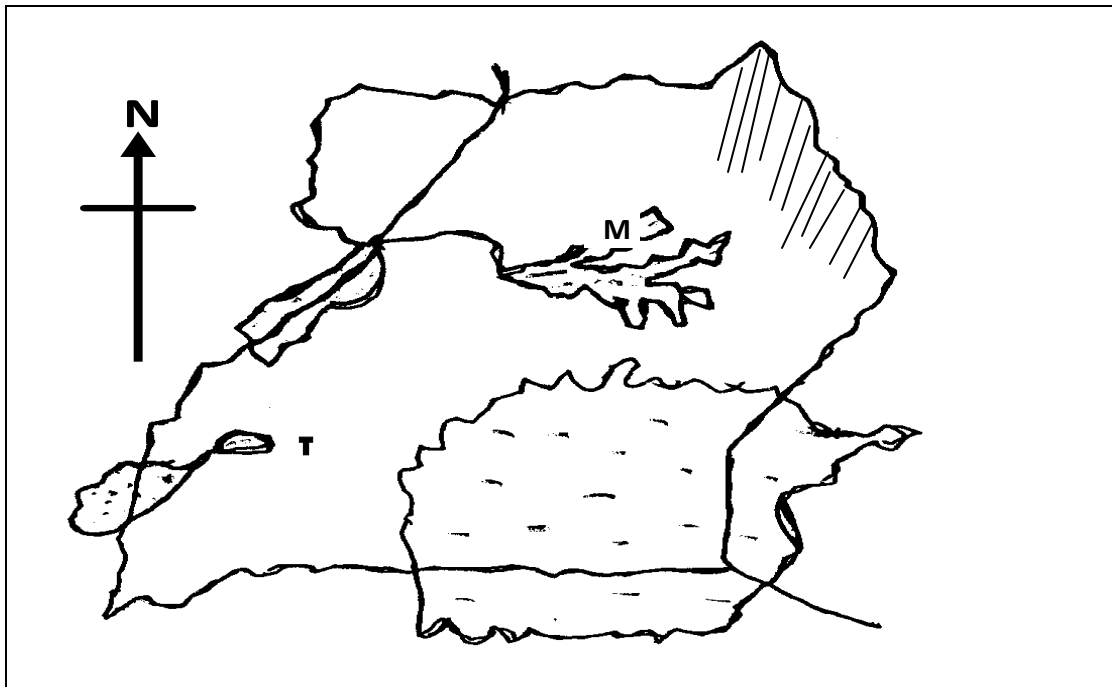
b) How can prefects be useful to teachers?

---

c) Why do some schools give prefects uniforms different from other pupils?

---

50. Study the sketch map of Uganda and use it to answer the questions that follow.



a) Mention the type of climate experienced in area shaded on the map. \_\_\_\_\_

b) Write one economic activity carried out in areas around Lake M.

\_\_\_\_\_

c) How do people in the shaded area maintain their climate?

\_\_\_\_\_

d) Name the lake labeled with T on the map.

\_\_\_\_\_

**For Questions 51 -55, answer Either Christianity or Islam but not both in a particular number.**

Either:

50. a) Why are Christians baptized?

\_\_\_\_\_

b) What does water represent in baptism?

\_\_\_\_\_

c) Name any two religious leaders who carry out baptism.

(i) \_\_\_\_\_

(ii) \_\_\_\_\_

Or:

a) What is circumcision?

\_\_\_\_\_

b) Why are Muslims circumcised?

---

c) Name one tribe in Uganda which practices circumcision.

---

d) Why do medical doctors encourage people to be circumcised?

---

Either:

a)What is trinity?

---

b) Mention the three people who make up the Holy trinity.

(i)\_\_\_\_\_

(ii)\_\_\_\_\_

(iii)\_\_\_\_\_

OR:

a)What is ablution ?

---

Name the two things used for ablution.

(i)\_\_\_\_\_

(ii)\_\_\_\_\_

c) Why do Muslims carry out ablution?

---

53. Either:

How did the following people meet their death?

a) The Uganda martyrs \_\_\_\_\_

b) Stephen the first martyr \_\_\_\_\_

c) Jesus Christ:  
\_\_\_\_\_

d) Abel son of Adam: \_\_\_\_\_

OR:

a) Write short notes on the following Caliphs.

a) Abubaker: \_\_\_\_\_

b) Umar: \_\_\_\_\_

c) Ali Abtwalib: \_\_\_\_\_

d) Uthman: \_\_\_\_\_

54. Either:

a) Name the two parts of the Bible.

(i) \_\_\_\_\_

(ii) \_\_\_\_\_

b) Why is the Bible regarded as a Holy book?

\_\_\_\_\_

c) In which way is the Bible similar to a constitution?

\_\_\_\_\_

Or:

a)List down two books that make up the Quran.

(i)\_\_\_\_\_

(ii)\_\_\_\_\_

b)Why is the Quran referred to as a Holy book?

\_\_\_\_\_

c)In which way is the Quran similar to the constitution?

\_\_\_\_\_

55. For both:

a)What is a talent?

\_\_\_\_\_

b) Give any two examples of talents.

(i)\_\_\_\_\_

(ii)\_\_\_\_\_

c) State one way people benefit from talents.

\_\_\_\_\_

\*\*\* End \*\*\*